

Prénom :


Date :

Approche de la multiplication 1



Calcul


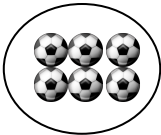
1. **Ecris** la multiplication correspondant au schéma :



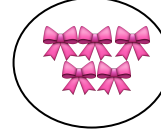
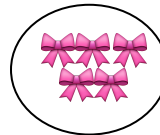
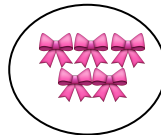
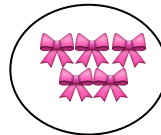
.....



.....



.....



.....

2. **Ecris** la multiplication correspondant au problème :

Chez la fleuriste, il y a 7 bouquets de 18 fleurs. Combien y a-t-il de fleurs ?

.....

Léo a acheté 4 paquets de 10 timbres. Combien a-t-il de timbres ?

.....

Prénom :


Date :

Approche de la multiplication 2



Calcul

1. **Ecris** le nombre de chapeaux de 2 façons :



- des additions :


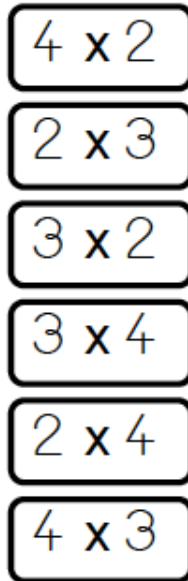

$$\dots + \dots + \dots + \dots + \dots =$$

$$\dots + \dots + \dots + \dots = \dots$$

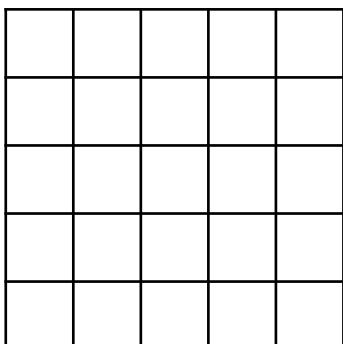
- des multiplications :

$$\dots \times \dots = \dots \quad \text{OU} \quad \dots \times \dots = \dots$$

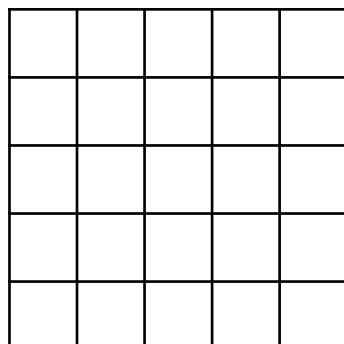
2. **Relie** les multiplications correspondants aux dessins :



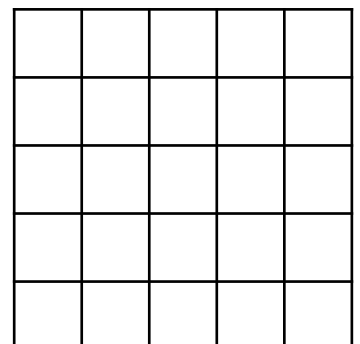
3. **Colorie** le nombre de carrés correspondants aux multiplications :



2 x 4



5 x 3



3 x 4

Prénom :

Date :

Approche de la multiplication 3



Calcul

1. **Ecris** le nombre de chapeaux de 2 façons :



- des additions :


$$\dots + \dots + \dots + \dots + \dots + \dots = \dots$$

$$\dots + \dots + \dots = \dots$$


- des multiplications :

$$\dots \times \dots = \dots \quad \text{OU} \quad \dots \times \dots = \dots$$


2. **Relie** les multiplications correspondants aux dessins :




3×4




4×3




4×5



5×3




4×4




5×4



3×2




5×5

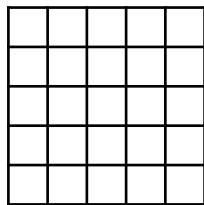


3×3


3. **Colorie** le nombre de carrés de chocolat correspondants aux multiplications :



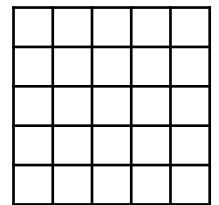
2×4




5×2




3×5




5×5



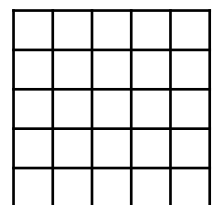
3×2



1×4



3×4



1×5